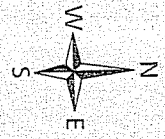


Geography 6
SW Asia and N. Africa Map List

Directions: Use the maps on pages 430-431 in your book to locate and label the following items on the attached map. It is suggested that you write small or use a number to label cities or small countries.



COUNTRIES:

- 1 Afghanistan
- 2 Iran
- 3 Iraq
- 4 Kuwait
- 5 Turkey
- 6 Syria
- 7 Lebanon
- 8 Jordan
- 9 Israel
- 10 Saudi Arabia
- 11 Bahrain
- 12 Qatar
- 13 United Arab Emirates
- 14 Oman
- 15 Yemen
- 16 Egypt
- 17 Libya
- 18 Tunisia
- 19 Algeria
- 20 Morocco
- 21 Western Sahara (Territory)

BODIES OF WATER:

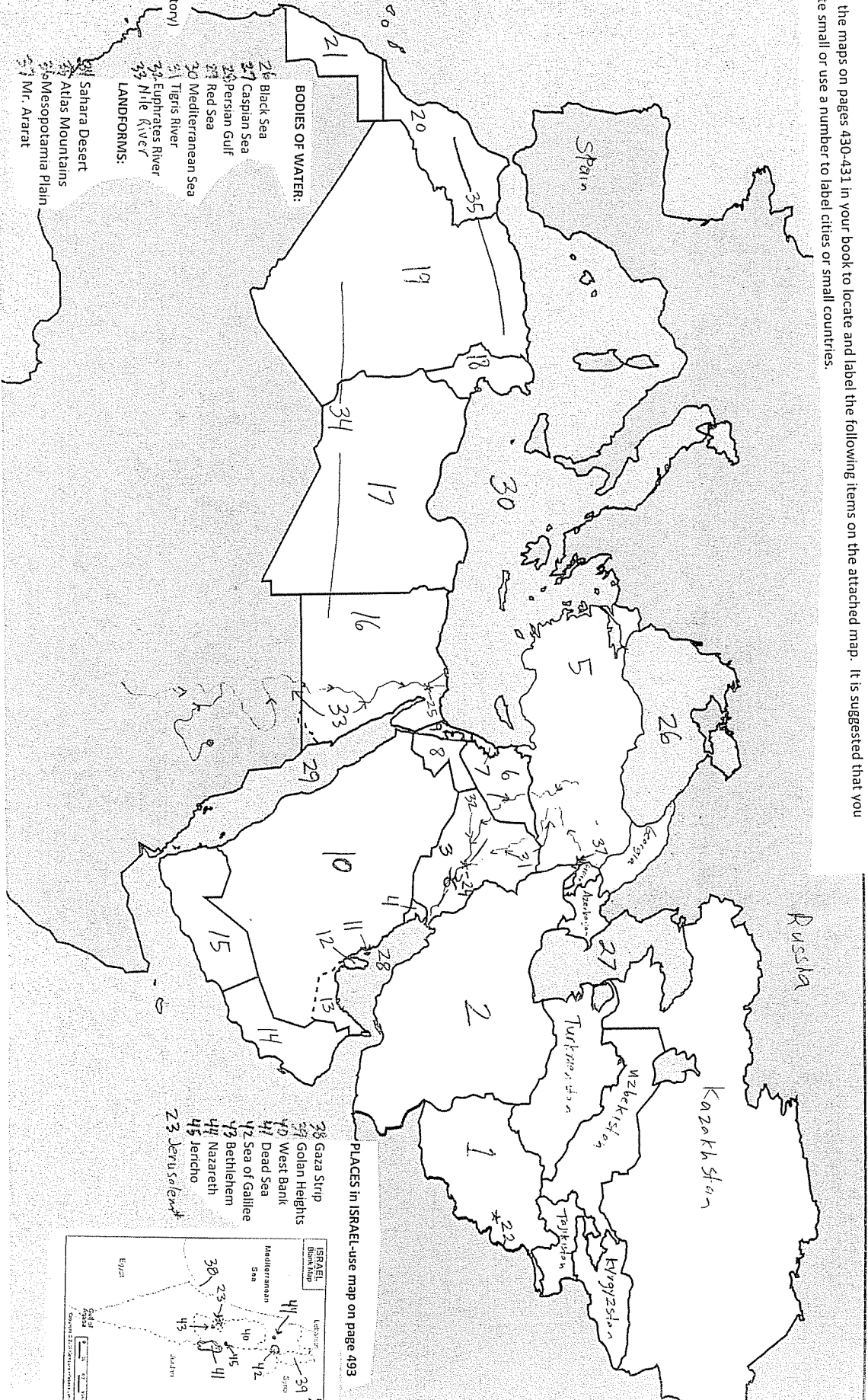
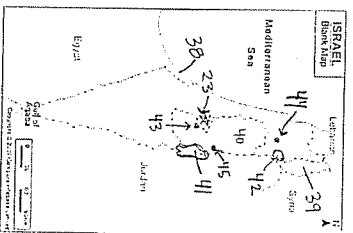
- 26 Black Sea
- 27 Caspian Sea
- 28 Persian Gulf
- 29 Red Sea
- 30 Mediterranean Sea
- 31 Tigris River
- 32 Euphrates River
- 33 Nile River

LANDFORMS:

- 34 Sahara Desert
- 35 Atlas Mountains
- 36 Mesopotamia Plain
- 37 Mr. Ararat

PLACES IN ISRAEL-use map on page 493

- 38 Gaza Strip
- 39 Golan Heights
- 40 West Bank
- 41 Dead Sea
- 42 Sea of Galilee
- 43 Bethelhem
- 44 Nazareth
- 45 Jericho
- 46 Jerru Salewa



Name SCHMIDT
Due _____
Test on countries only _____
Test on the rest _____